



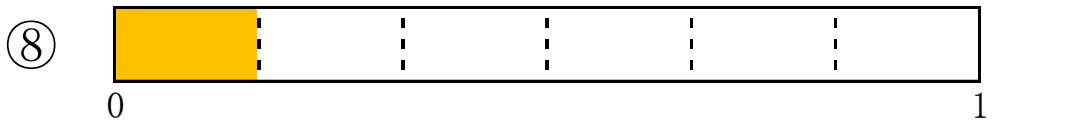
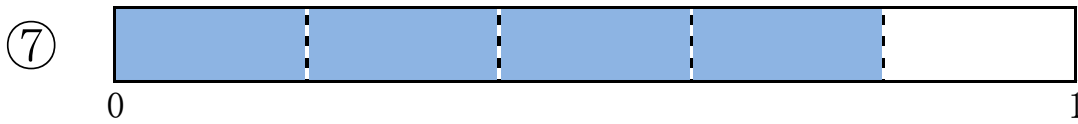
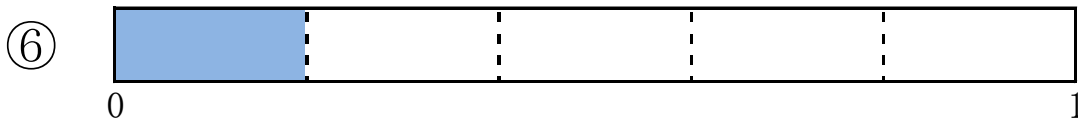
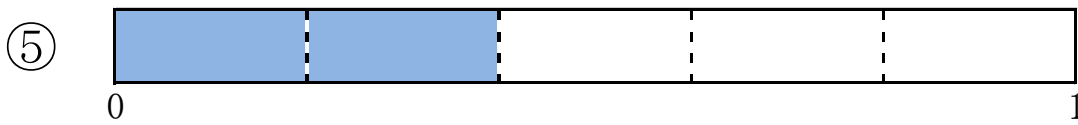
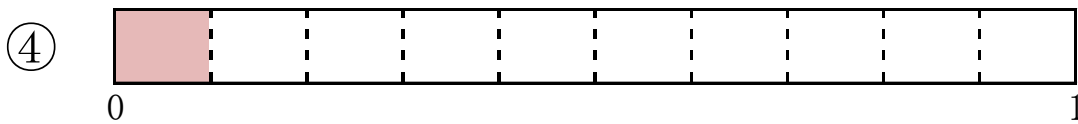
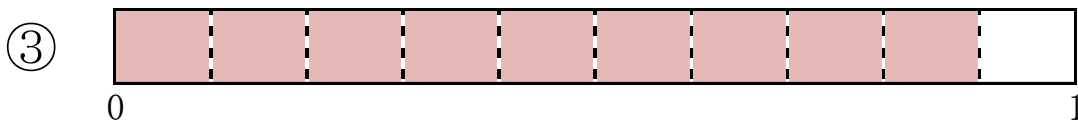
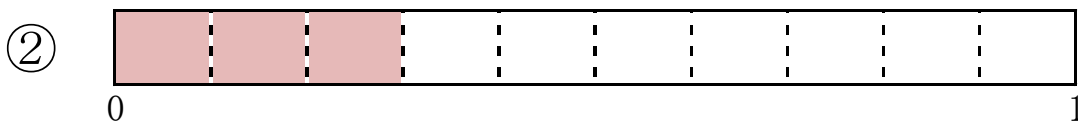
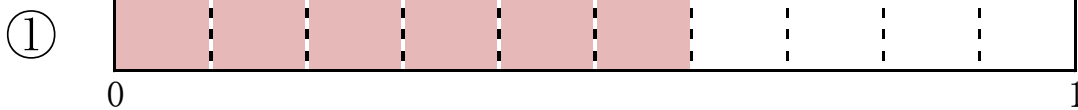
4年生の計算プリント

■分数 (1)

下記のテープの絵を見て、表している分数を答えましょう。

名前 _____

答え





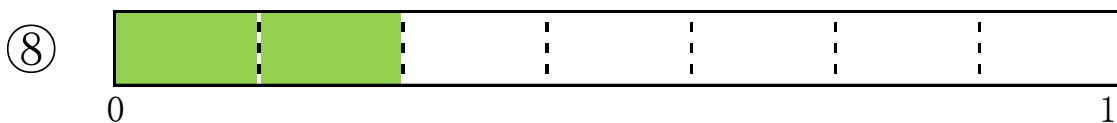

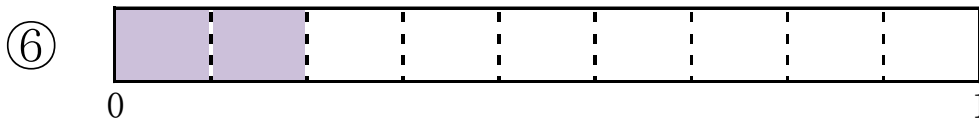
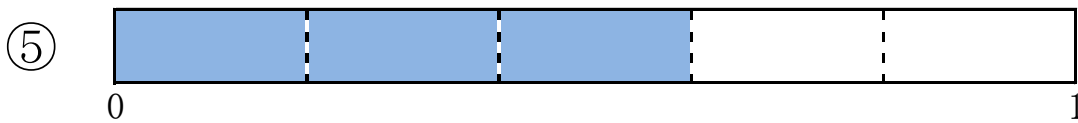
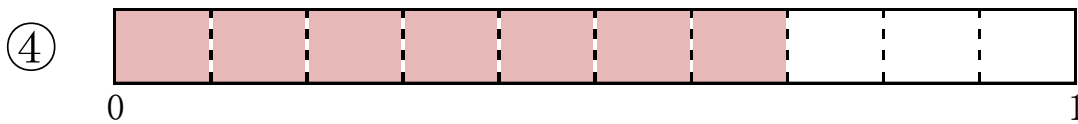
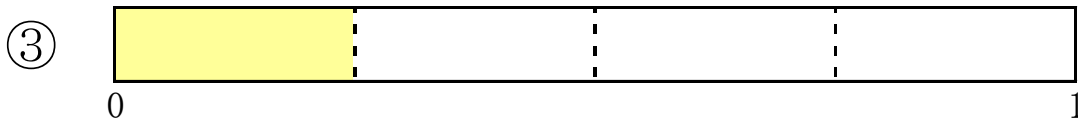
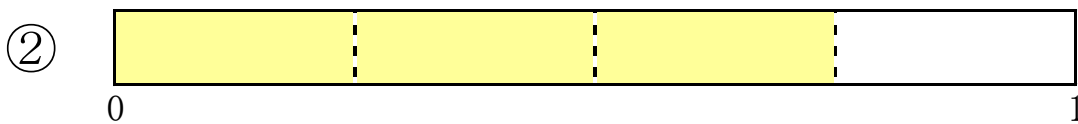
4年生の計算プリント

■分数 (1)

下記のテープの絵を見て、表している分数を答えましょう。

名前 _____

答え





4年生の計算プリント

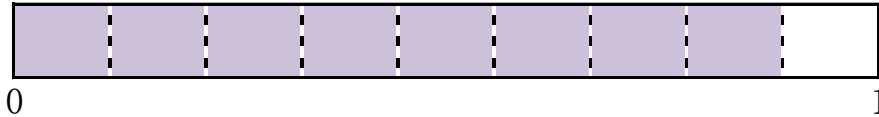
■分数 (1)

下記のテープの絵を見て、表している分数を答えましょう。

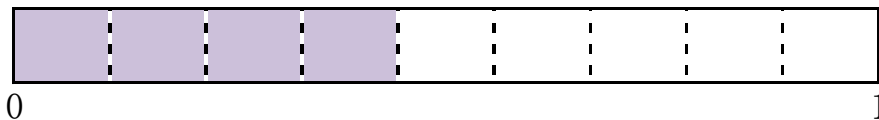
名前 _____

答え


①



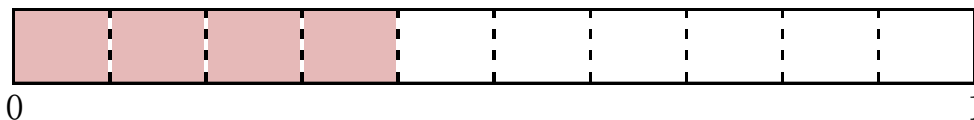
②




③



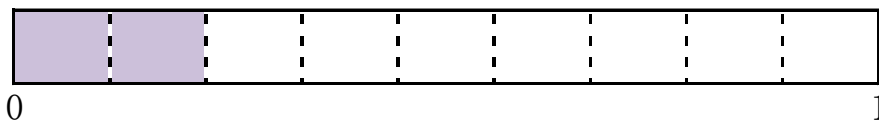
④



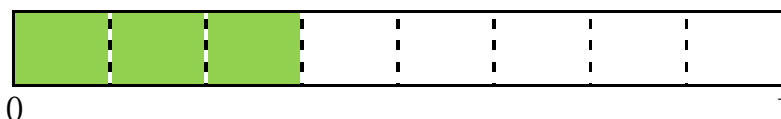
⑤



⑥



⑦



⑧





答え ■分数 (1)

page 1

① $\frac{6}{10}$

② $\frac{3}{10}$

③ $\frac{9}{10}$

④ $\frac{1}{10}$

⑤ $\frac{2}{5}$

⑥ $\frac{1}{5}$

⑦ $\frac{4}{5}$

⑧ $\frac{1}{6}$

page 2

① $\frac{1}{2}$

② $\frac{3}{4}$

③ $\frac{1}{4}$

④ $\frac{7}{10}$

⑤ $\frac{3}{5}$

⑥ $\frac{2}{9}$

⑦ $\frac{6}{7}$

⑧ $\frac{2}{7}$

page 3

① $\frac{8}{9}$

② $\frac{4}{9}$

③ $\frac{2}{3}$

④ $\frac{4}{10}$

⑤ $\frac{1}{3}$

⑥ $\frac{2}{9}$

⑦ $\frac{3}{8}$

⑧ $\frac{7}{8}$